

Name : _____

Score : _____

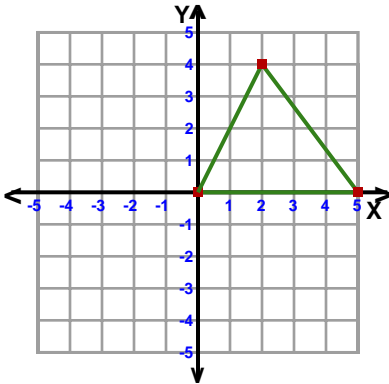
Teacher : _____

Date : _____

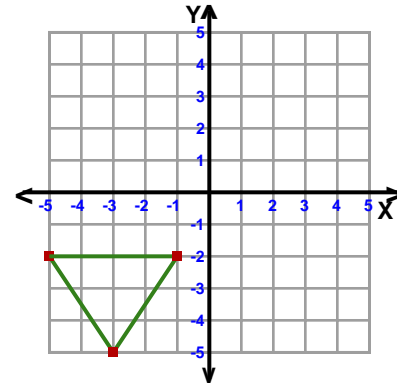
Transformations

ccw = counterclockwise

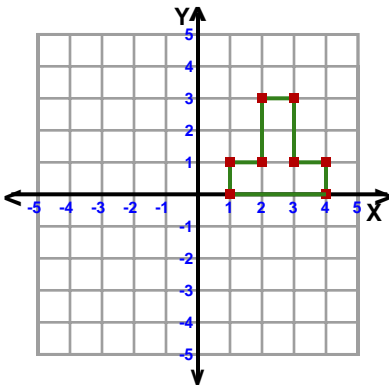
- 1) Reflection: Across the line $x = 1$



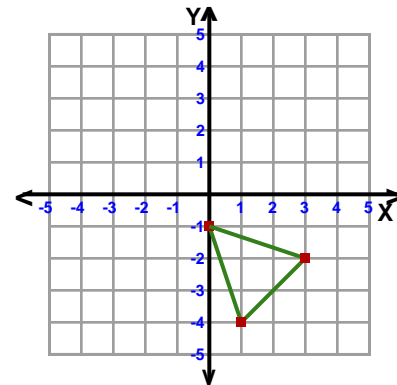
- 2) Rotation: 180° about the origin



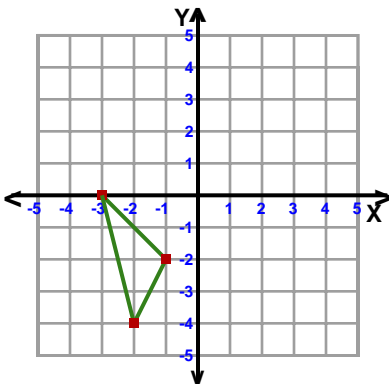
- 3) Rotation: 180° about the origin



- 4) Translation: 5 left and 3 up



- 5) Reflection: Across the y-axis



- 6) Translation: 4 left and 5 up

